


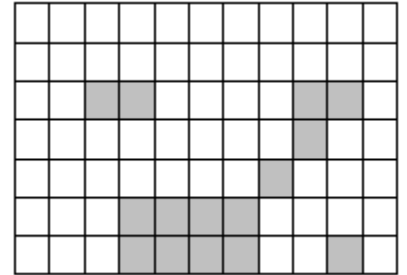
Name:

QUIZ 2 – MATH GRADE 9

1. (20%) Divide the following circle to 8 equal pieces and shade $\frac{3}{8}$



2. (20%) Determine the fraction shaded: _____

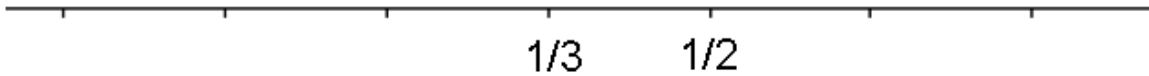


3. (20%) Alex ate $\frac{2}{7}$ of the cookies in the jar, Marta ate $\frac{3}{11}$

a. (10%) Who ate more?

b. (10%) What number of cookies in a jar would make the problem easy to solve?

4. (20%) Complete all the missing fractions on the following number line:



5. (20%) Complete all the missing fractions on the following number line:

